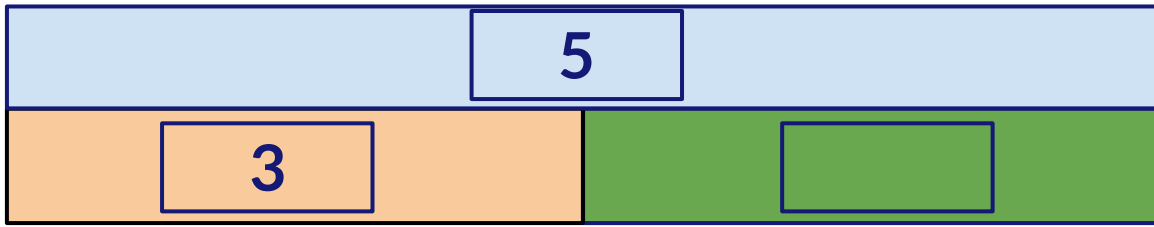


## Part-Part-Whole Model

Write the equation and find the answer.

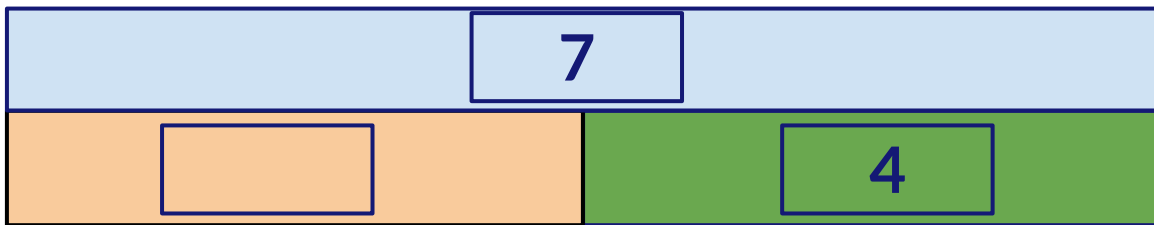
Scott saw 5 animals in jungle. There were 3 elephants and the rest were foxes. How many foxes must Scott have seen? Write the equation and find the answer.



+

=

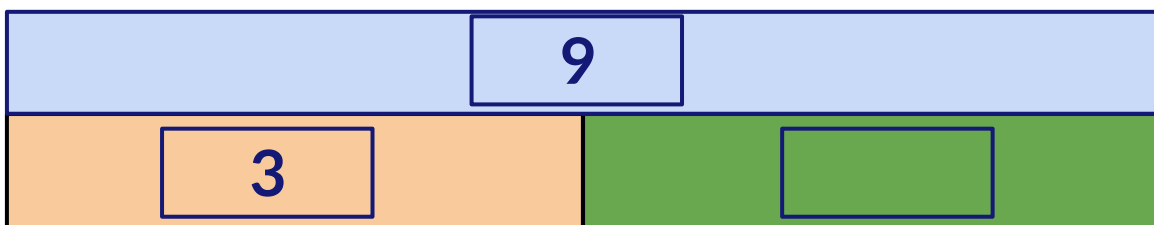
There are 4 frogs hopping. Some more frogs joined in. Now there are 7 frogs hopping together. How many frogs had joined in? Write the equation and find the answer.



+

=

Mia baked 9 cookies. 3 of them are chocolate cookies and the rest are caramel cookies. How many caramel cookies did she bake? Write the equation and find the answer.



+

=