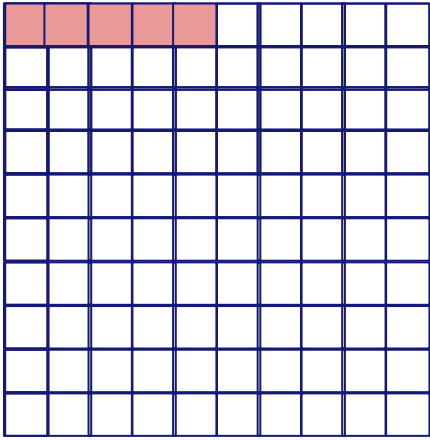



## Compare Decimals Using Model

Write a fraction for each of the models and compare them using  $>$ ,  $<$  and  $=$ .

1


$$\frac{\square}{\square}$$

$$\frac{\square}{\square}$$


$$\square$$


2

$$\frac{\square}{\square}$$

$$\frac{\square}{\square}$$


$$\square$$
