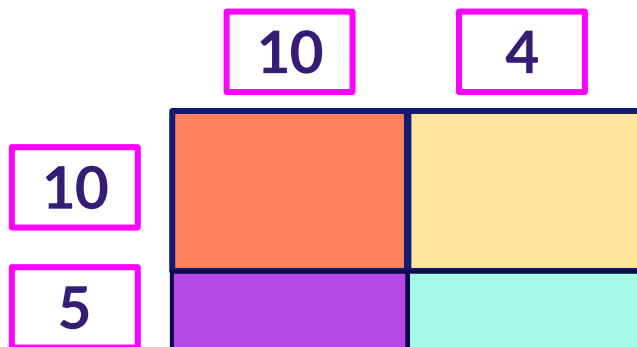


The Area Model

Complete the area model.

1

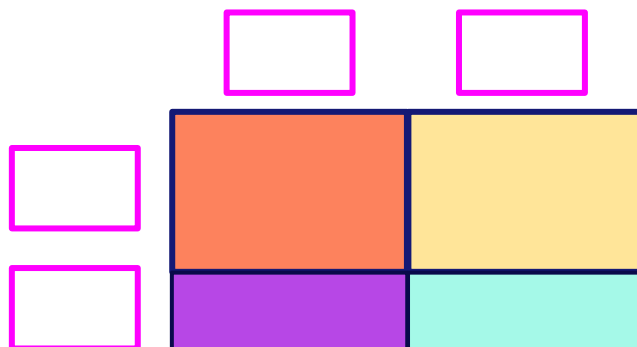
$$15 \times 14 =$$



$$15 \times 14 = \boxed{} + \boxed{} + \boxed{} + \boxed{}$$

2

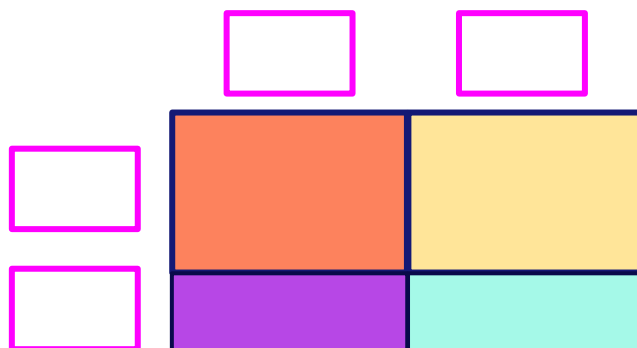
$$16 \times 15 =$$



$$16 \times 15 = \boxed{} + \boxed{} + \boxed{} + \boxed{}$$

3

$$18 \times 12 =$$



$$18 \times 12 = \boxed{} + \boxed{} + \boxed{} + \boxed{}$$