


Two Division Sentences

Complete the two different division sentences using the given array. Also, write the meaning of each number in the division sentence.




$$\boxed{12} \div \boxed{} = \boxed{}$$

jellies rows of jellies jellies in each row

$$\boxed{12} \div \boxed{} = \boxed{}$$

jellies jellies in each row rows of jellies




$$\boxed{10} \div \boxed{} = \boxed{}$$

boats boats in each row _____

$$\boxed{10} \div \boxed{} = \boxed{}$$

boats rows of boats _____



$$\boxed{} \div \boxed{4} = \boxed{}$$

_____ _____ _____

$$\boxed{} \div \boxed{} = \boxed{}$$

_____ marbles in each row _____