
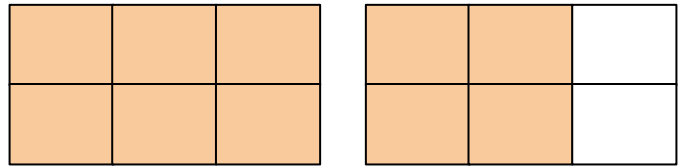


Identify Fractions Greater Than 1

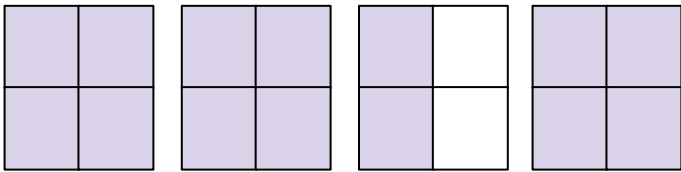
Write the fractions represented by the models. Circle the fraction that is greater than 1.




$$\frac{\square}{\square}$$




$$\frac{\square}{\square}$$




$$\frac{\square}{\square}$$



$$\frac{\square}{\square}$$



$$\frac{\square}{\square}$$



$$\frac{\square}{\square}$$