


Add or Subtract

Circle the correct answer.

1

Henry had 3 marbles. Mia gave him 4 more. How many marbles does Henry have now?




$3 + 4$

$4 - 3$

2

Jo had 8 cookies. She gave 4 of them to Rory. How many cookies are left with Jo?




$4 + 8$

$8 - 4$

3

Ben has 5 toy ducks and 2 airplanes. How many toys does Ben have in all?



$5 - 2$

$5 + 2$