


Derive a Fact Using Visual (B)

Enclose part of the array based on the given multiplication fact and then use it to find the new multiplication fact.

1




$$3 \times 2 = \underline{\quad}$$

$$4 \times 2 = \underline{\quad} + \underline{\quad}$$

$$= \underline{\quad}$$

2




$$5 \times 4 = \underline{\quad}$$

$$6 \times 4 = \underline{\quad} + \underline{\quad}$$

$$= \underline{\quad}$$

3



$$4 \times 3 = \underline{\quad}$$

$$5 \times 3 = \underline{\quad} + \underline{\quad}$$

$$= \underline{\quad}$$