


Derive a Fact Using Visual (A)

Enclose part of the array based on the given multiplication fact and then use it to find the new multiplication fact.

1




$$5 \times 2 = 10$$

$$6 \times 2 = 10 + \underline{\quad}$$

$$= \underline{\quad}$$

2

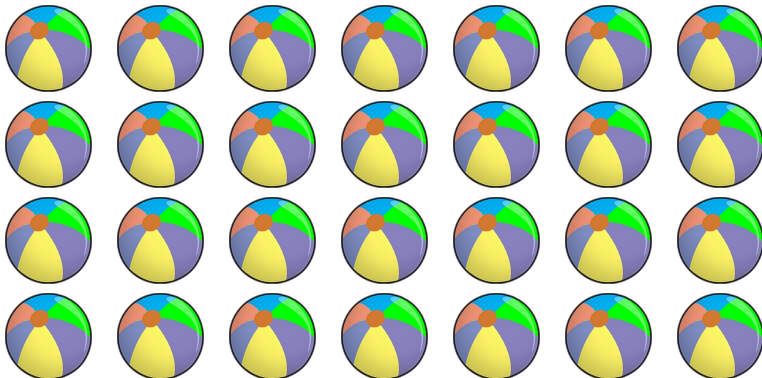


$$3 \times 3 = 9$$

$$4 \times 3 = 9 + \underline{\quad}$$

$$= \underline{\quad}$$

3



$$6 \times 4 = 24$$

$$7 \times 4 = \underline{\quad} + \underline{\quad}$$

$$= \underline{\quad}$$