

Repeated Addition

Use repeated addition to find the sum.

1







+

+

=

2



+

+

+

=

3



+

+

=